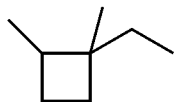


Alkane Naming Practice

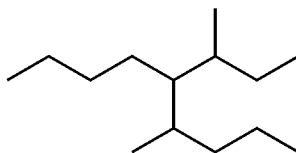
NAME _____

Fill in the blanks. Provide names for the compounds or substituents, or provide structures from the given names.

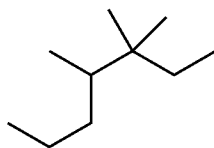
Structure to Name



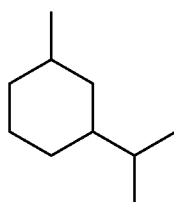
1-ethyl-1,2-dimethylcyclobutane



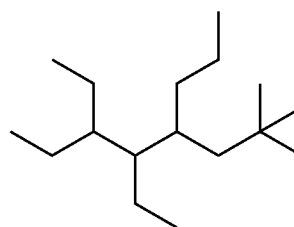
A _____



B _____

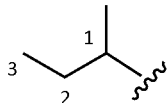


C _____

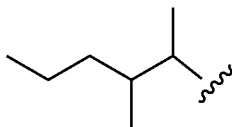


D _____

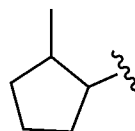
Complex Substituents



(1-methylpropyl)



E _____



F _____

Name to Structure

1-ethyl-2-methyl-1,3-dipropylcyclopentane G

4-cyclopropyl-5-methyloctane H

5-(3,3-dimethylbutyl)undecane I